










NÁSOBENÍ ČÍSLEM 2



Škrtni vajíčka, která nejsou násobky čísla 2 :



Kolik je na obrázku kuřátek ?
Utvoř příklad na násobení.



○ Příklad : _____

○ Odpověď' : _____

Vypočítej :

$2 \cdot 4 =$

$2 \cdot 8 =$

$2 \cdot 3 =$

$2 \cdot 6 =$

$2 \cdot 9 =$

$2 \cdot 7 =$

$2 \cdot 1 =$

$2 \cdot 0 =$



Ke každému číslu utvoř příklad na násobení :

○ 20 =

○ 14 =







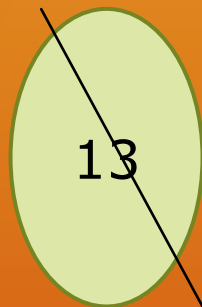


○ 12 =

○ 8 =




Řešení :

Škrtni vajíčka, která nejsou násobky čísla 2 :



Kolik je na obrázku kuřátek ?
Utvoř příklad na násobení.



○ Příklad : 2 . 4 = 8

○ Odpověď : Na obrázku je 8 kuřátek.

Ke každému číslu utvoř příklad na násobení :

○ $20 = 2 \cdot 10$

○ $14 = 2 \cdot 7$

○ $12 = 2 \cdot 6$

○ $8 = 2 \cdot 4$

